

Putman Elementary

Blizzard Bags

First Grade

Day 1

Due Friday, April 11, 2014

| Check when completed | Assignment | Parent initials |
|----------------------|---|-----------------|
| | Reading: ar/or worksheet, practice reading words | |
| | Reading: Read <u>Bob's Jobs</u> and answer the 7 questions. | |
| | Math: Subtracting Tens | |
| | Language Arts: Ending punctuation paper | |
| | Social Studies: March 2014 calendar and questions | |
| | Science: Basic Needs with Rachel's Rabbit | |

The State of Ohio allows us to utilize "at home" work for students in case of a snow day beyond our 5 calamity days. Attached you will find the work we would like for your child to complete while at home. You must send the completed projects to school in two weeks in order to get credit. If the work is not returned, your child will be counted absent for the day.

Student name: _____

Parent Signature: _____

Date: _____

Name: _____

Date: _____

Usually, **ar** has the sound you hear in **barn**.

Usually, **or** has the sound you hear in **horn**.







barn



horn



Circle the correct name for each picture.

| | | |
|---|--|--|
| 1.  aim arm | 2.  corn cone | 3.  pack park |
| 4.  hose horse | 5.  star stay | 6.  stare store |

In the first row, write **ar** to complete each word. In the second row, write **or** to complete each word. Then read the words aloud.

7.

c d

p t

f m

8.

c d

p t

f m

Name _____

Bob's Jobs

Bob helps his mom. He feeds the fish. He can brush his own teeth. He puts the trash out in the can. He can take the baby out for a walk in the buggy. When it gets dark, he puts the dog out in the yard.

1. Who does Bob help?

2. What does Bob brush?

3. What does Bob feed?

4. Who does Bob take for a walk?

5. When does Bob put the dog out?


6. What does Bob put in the can?



★7. How do **you** help at home? Draw a picture of what you do.


Name _____

Subtracting Tens



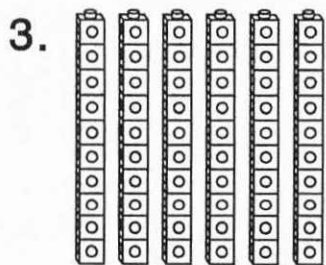
$$7 \text{ tens} - 5 \text{ tens} = \underline{2} \text{ tens}$$

$$\underline{70} - \underline{50} = \underline{20}$$



$$7 \text{ tens} - 2 \text{ tens} = \underline{5} \text{ tens}$$

$$\underline{\quad} - \underline{\quad} = \underline{\quad}$$




$$6 \text{ tens} - 2 \text{ tens} = \underline{\quad} \text{ tens}$$

$$\underline{\quad} - \underline{\quad} = \underline{\quad}$$

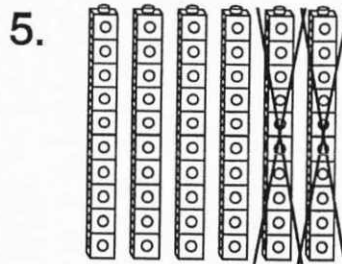
Name _____

Subtracting Tens (continued)

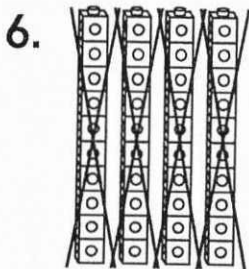
Write the numbers. Subtract.




6 tens - 1 ten
60 - 10 = 50




_____ tens - _____ tens
_____ - _____ = _____




_____ tens - _____ tens
_____ - _____ = _____



_____ tens - _____ tens
_____ - _____ = _____




_____ tens - _____ tens
_____ - _____ = _____



_____ tens - _____ tens
_____ - _____ = _____

Name _____



Put a or at the end of each sentence.

- | | |
|---|---|
| 1. Mickey is happy <input type="checkbox"/> | 5. The crab bit Pluto's tail <input type="checkbox"/> |
| 2. Mickey sees Pluto <input type="checkbox"/> | 6. He will not let go <input type="checkbox"/> |
| 3. Is Pluto having fun <input type="checkbox"/> | 7. Can Pluto swim <input type="checkbox"/> |
| 4. He is surprised <input type="checkbox"/> | 8. What will happen now <input type="checkbox"/> |

Color one ★ for each you find.

Color one ♪ for each you find.



Name: _____

Fill in the missing numbers. Then follow the directions.

| March 2014 | | | | | | |
|---------------------------|---------------------|---------|-----------|---------------------|--------|----------|
| Sunday | Monday | Tuesday | Wednesday | Thursday | Friday | Saturday |
| | | | | | | 1 |
| 2 Dr. Seuss's birthday | | | | 6 | | |
| | | 11 | 12 | | | |
| | Saint Patrick's Day | | 19 | First day of spring | | 22 |
| | 24 | | | | | |
| | | | | | | |

1. What is the date of Dr. Seuss's birthday?

2. Which day of the week is the first day of spring?

Tuesday Wednesday Thursday

3. Which holiday is three days before the first day of spring?

4. How many days are there in March? _____



How many Saturdays are there in March? _____

Rachel's Rabbit

Rachel got a pet rabbit for her birthday. She wants to make sure that her rabbit has everything it needs to live. All living things have five basic needs.

| Basic Need | Rachel's Rabbit |
|--------------|----------------------------|
| <i>Water</i> | <i>Filled water bottle</i> |
| | |
| | |
| | |
| | |